

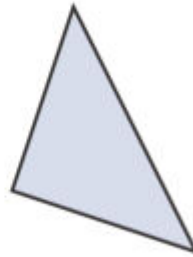
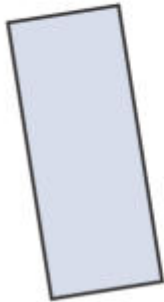


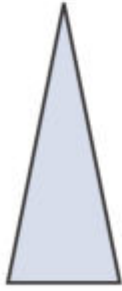
LONG AND SHORT

KS1 – 2003 Paper

1.

7 One shape has **2 long** sides and **2 short** sides.

Tick (✓) it.



KS1 – 2003 Paper 2

2.



Sita

On my 3rd birthday,
I was **95cm** tall.
Now I am **28cm taller**.

How tall is Sita now?

cm

KS1 – 2009 Paper 1




3.

14 The lines show the lengths of some models.

Two of these models are the **same length**.

Use a ruler to find them.

Tick (✓) them.



KS1 – 2018 Paper – Reasoning

4.

12 Ajay's plant was **11** centimetres tall.

It grows **7** centimetres taller.

How tall is the plant now?

 cm


1 mark

5.

26 Kemi makes a pattern with sticks.

Some are long and some are short.

She writes a number pattern on the sticks.



Write the number that will be on the next **short** stick.

1 mark